

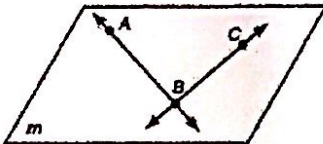
Name:

Period:

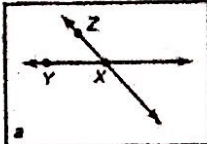
Math 2 Ch1.1 Homework

Identify the point(s), line(s), and plane(s) in each figure.

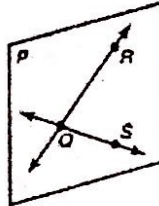
1.



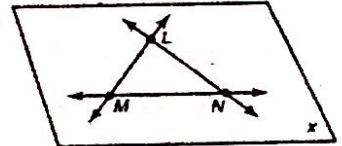
2.



3.



4.



Draw a figure for each description. Label all points mentioned in the description.

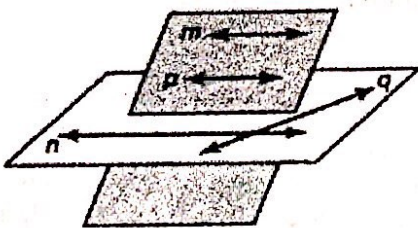
5. Points R , S , and T are collinear such that point T is located halfway between points S and R .

6. Points A , D , and X are collinear such that point A is located halfway between points D and X .

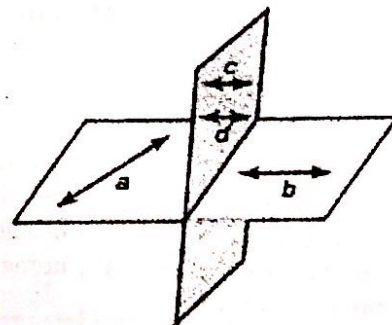
7. Points A , B , and C are collinear such that point B is between points A and C and the distance between points A and B is twice the distance between points B and C .

Identify all examples of coplanar lines in each figure.

9.



10.



Draw and label an example of each geometric figure.

17. \overleftrightarrow{XY}

18. \overline{CD}

19. \overrightarrow{PR}

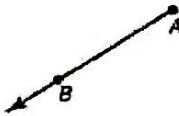
20. \overleftrightarrow{FG}


21. \overleftrightarrow{HM}

22. \overline{KJ}


Use symbols to write the name of each geometric figure.


23. 

24. 

25. 

26. 

27. 

28. 

How did you feel while completing this homework?

1: I understood and could complete essentially no problems on this homework.	2: I could complete less than half of the problems on this homework.	3: I could complete most of the problems but got stuck on some of them as well.	4: I understood and could complete essentially all problems on this homework